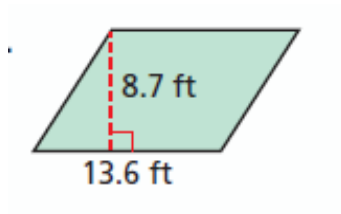


6-2 Weekly Homework

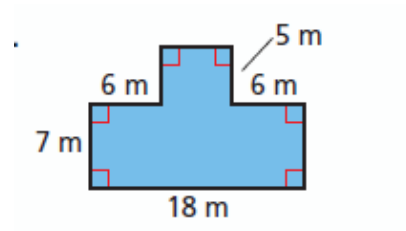
1. The opening of a playscape tunnel has a circumference of 25.12 ft. What is the radius of the tunnel to the nearest tenth?

Find the area of each figure below.

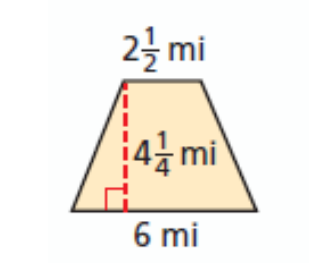
2.



3.



4.



5. The area of a rectangular computer lab is 660 ft², and the width is 22 ft. What is the length of the computer lab?