
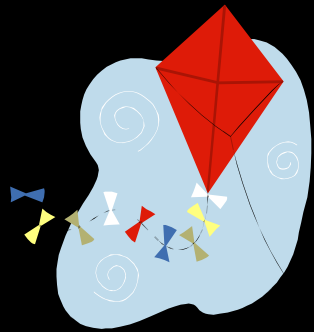


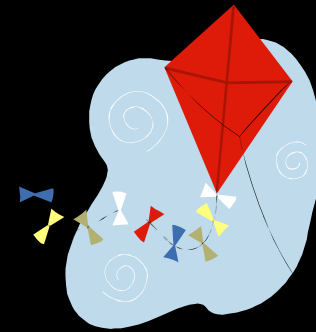
Warm Up # 1



The first 150 attendees at a baseball game each received a free baseball bat. If this represented 30% of the total game attendance, how many people attended the game? Justify your answer.



Warm Up # 2



The directions that came with the kite pattern that Andre ordered on the Internet said to cut out two supplementary angles so that the measure of one is twice the measure of the other. How many degrees are in each angle. Justify your answer.



Warm Up # 3



Four friends went to the mall for a day of shopping. They stopped at the candy shop and decided to share the cost of gummy hearts. They scooped some gummy hearts into a bag and took them to the register. The bag weighed 3.2 pounds. If the gummy hearts cost \$3.50 per pound, how much should each friend pay? Justify your answer.