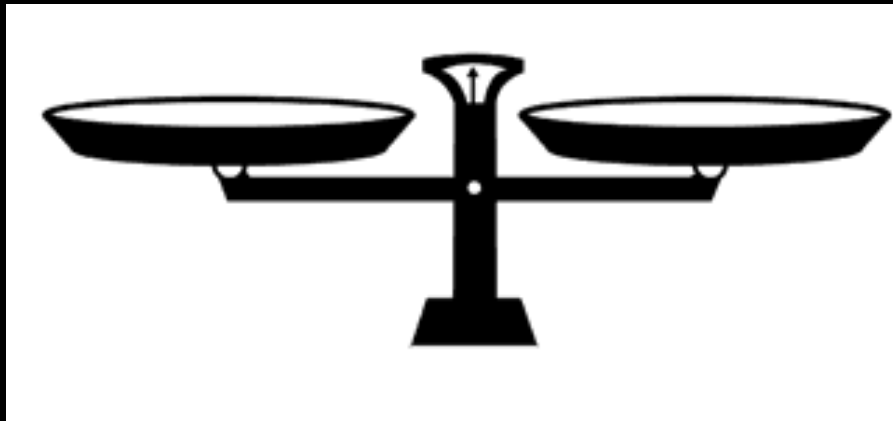
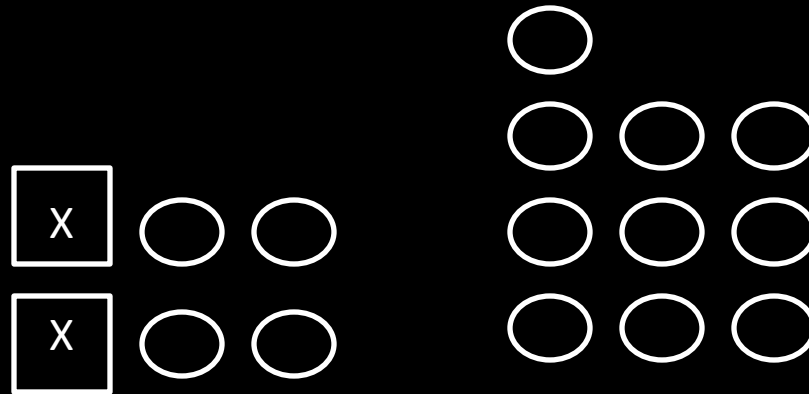


Warm Up # 1

- Copy the daily agenda into your agenda book.
- What is the second step in solving the equation below?

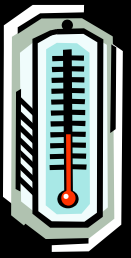


Warm Up # 2


- Copy the daily agenda into your agenda book.
- Simplify each expression below.

$$3^2 + 2(-6 + 2) \div 1$$

$$15 \div 5 + 5 \times 2 \div 2$$



Warm Up # 3



- Copy the daily agenda into your agenda book.
- Joseph recorded the morning low and afternoon high temperatures on Monday. The morning low was -5°F and the afternoon high was 10°F . What was the difference in temperature between the morning low and afternoon high?