

# Warm Up # 1

- Copy the daily agenda into your agenda book.

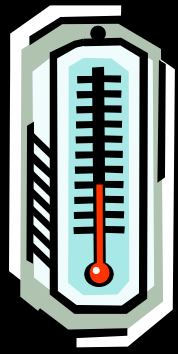
Which of the following statements is true?

**A** 0.23 is between  $\frac{1}{10}$  and  $\frac{1}{5}$ .


**B** 0.23 is between  $\frac{1}{10}$  and  $\frac{1}{8}$ .

**C** 0.23 is between  $\frac{1}{8}$  and  $\frac{1}{4}$ .

**D** 0.23 is between  $\frac{1}{4}$  and  $\frac{1}{3}$ .



## Warm Up # 2




**Copy the daily agenda into your agenda book.**

**The low temperature recorded one morning was  $-10^{\circ}\text{F}$ . The high temperature recorded that afternoon was  $35^{\circ}\text{F}$ . What was the change in temperature from the morning low to the afternoon high? Please show your work and be ready to explain how you got your answer.**


# Warm Up # 3

- Copy the daily agenda into your agenda book.
- Which model represents  $4^2$ ?

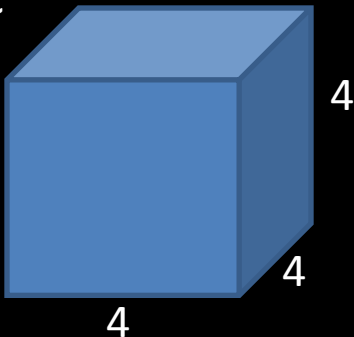
A



B



C



D

